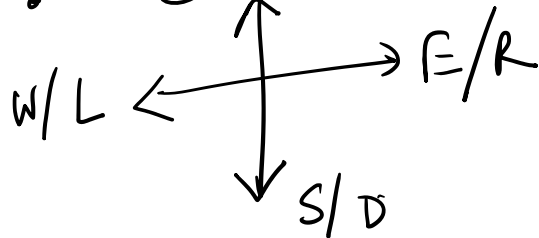
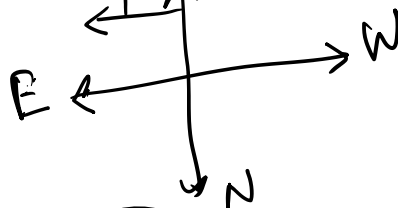

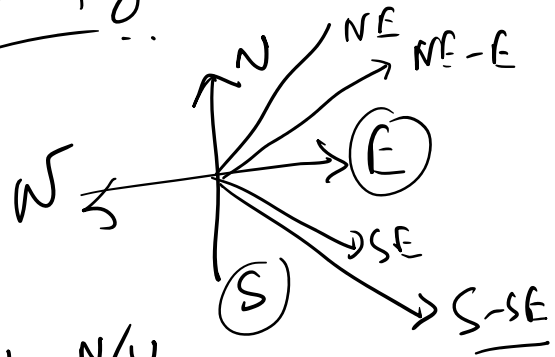
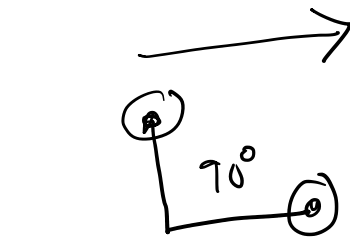
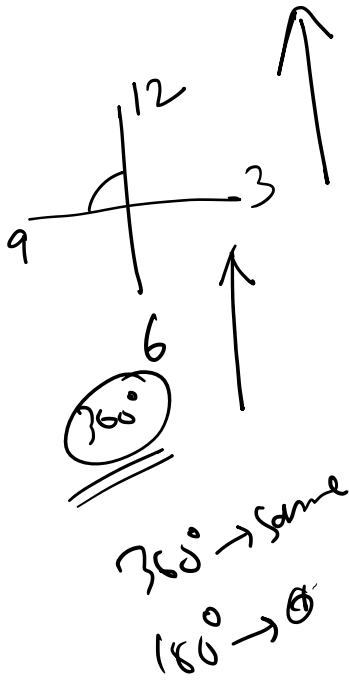


# Diagram Based Reasoning



9062395123

↑ N  
Left turn  
Right turn

Personne Direction

ग्रहण  
ग्रहण

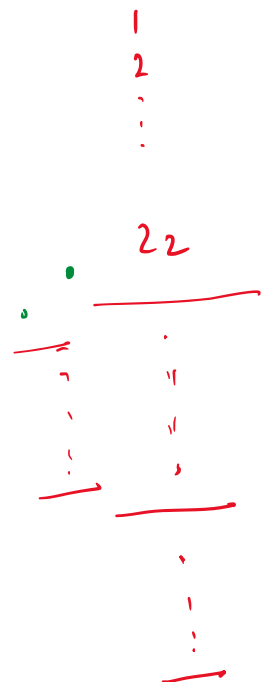
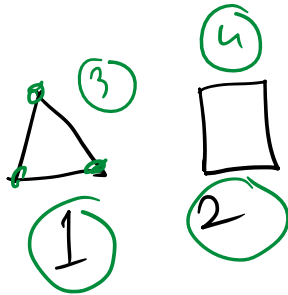


②

①

②

①




Corner Counting

①

- ② Direction changing.
- ③ Angle / Degree change..

④ Vamsi

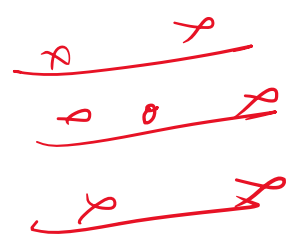
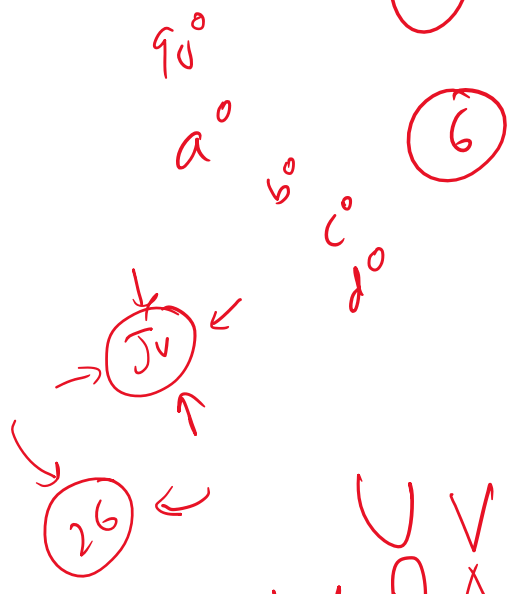
⑤ Tracing



- ① ~~OK~~
- ②
- ③

$$a^2 + b^2 = c^2$$

$$p^2 + q^2 = \Delta^2$$



TY  
S  
2  
T  
I

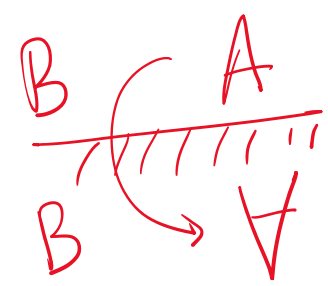
③

X O I

H

④

W U V  
M N X  
C



A  
B

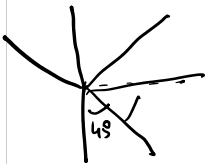
F F Q Q  
R R

C C  
N N

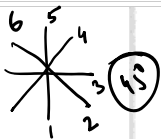


**Directions (Q. Nos. 1-23)** In each of the questions given below, which one of the five answer figures should come after the question figures on the right, if the sequence were continued.

220



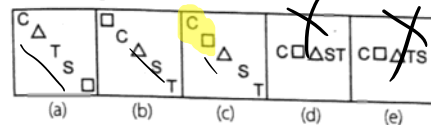
+X +X +X +X +X +X +X +X



**1. Question Figures**

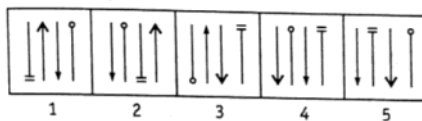


**Answer Figures**




C T S  
T C S  
T C S  
S C T  
C T S

**2. Question Figures**

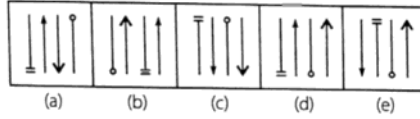


**Answer Figures**

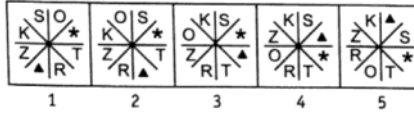


1 2 3 4 5

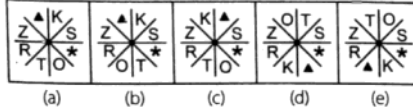
**Answer Figures**



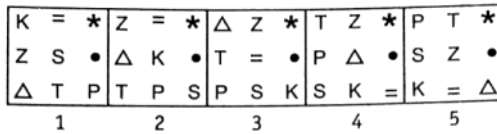
**3. Question Figures**



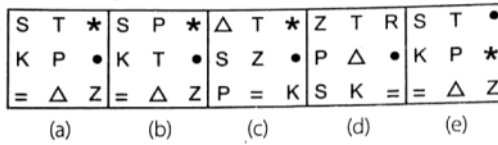
**Answer Figures**



**4. Question Figures**

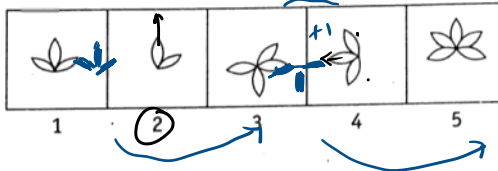


**Answer Figures**


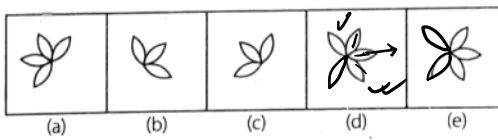


*Invert  
& Colours  
Answer*

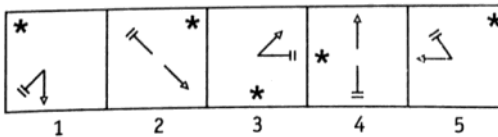
**5. Question Figures**



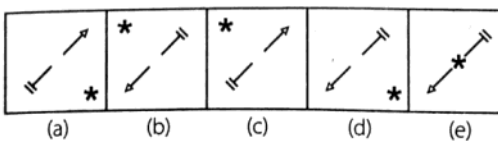
**Answer Figures**



**6. Question Figures**



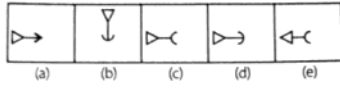
**Answer Figures**



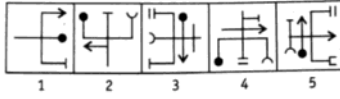
7. Question Figures



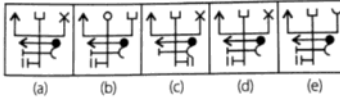
Answer Figures



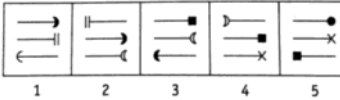
8. Question Figures



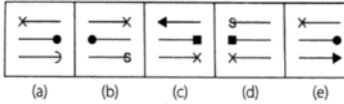
Answer Figures



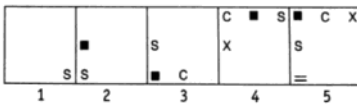
9. Question Figures



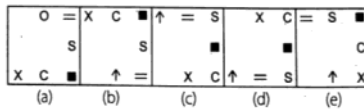
Answer Figures



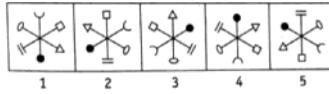
10. Question Figures



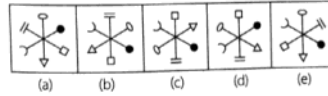
Answer Figures



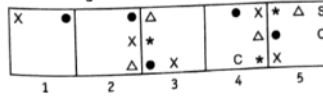




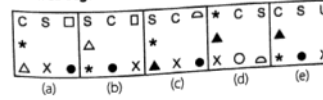
Answer Figures



18. Question Figures



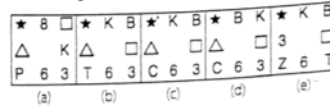
Answer Figures



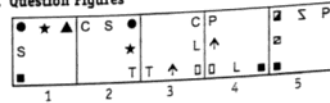
19. Question Figures



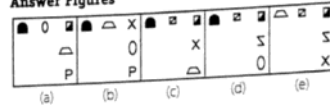
Answer Figures



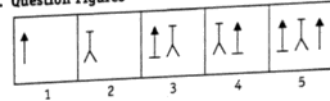
20. Question Figures



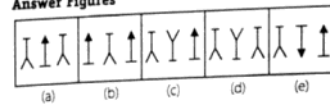
Answer Figures



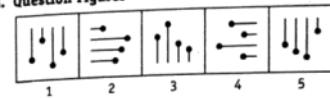
21. Question Figures



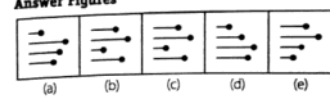
Answer Figures



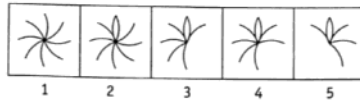
22. Question Figures



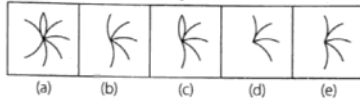
Answer Figures



**23. Question Figures**

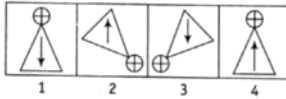


**Answer Figures**

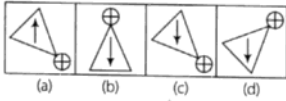


**Directions (Q. Nos. 24-25)** In each item, there are two set of figures; first four figures named question figures and next four figures names answer figures indicated as (a), (b), (c) and (d). The question figures follow a particular sequence. In accordance with the same, which one of the four answer figures should appear as the fifth figure?

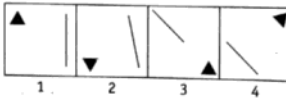
**24. Question Figures**



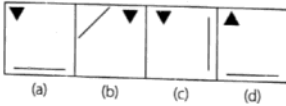
**Answer Figures**



**25. Question Figures**



**Answer Figures**



*Sed Tean six*

- ① *Subtle*
- ②
- ③

*House of Cards*